


# UPEI Department of Music

## Sample Theory Assessment

1. Name the following notes, including octave number:



Musical notation for question 1. The first staff is a treble clef with a key signature of one flat (Bb). The notes are: E4 (quarter), Bb4 (quarter), G4 (quarter), F#4 (quarter), E5 (quarter), D5 (quarter), C5 (quarter), Bb4 (quarter), Ab4 (quarter), G4 (quarter). The second staff is a bass clef with a key signature of one flat (Bb). The notes are: G3 (quarter), F#3 (quarter), E3 (quarter), D3 (quarter), C3 (quarter), Bb2 (quarter), Ab2 (quarter), G2 (quarter), F#2 (quarter), E2 (quarter).


2. Provide both the major and minor key indicated by each key signature:



Musical notation for question 2. The staff is a treble clef with a key signature of one sharp (F#). The key signatures shown are: F# (one sharp), C# (two sharps), G# (three sharps), Bb (one flat), Fb (two flats), C# (two sharps), G# (three sharps), Bb (one flat), F# (one sharp), Bb (one flat), F# (one sharp), C# (two sharps).


3. Write the following scales using the correct key signature:

a) E Major, ascending




Musical notation for question 3a: A blank treble clef staff for writing the E Major ascending scale.

b) b harmonic minor, descending:



Musical notation for question 3b: A blank treble clef staff for writing the B harmonic minor descending scale.

c) c melodic minor, ascending and descending:



Musical notation for question 3c: A blank treble clef staff for writing the C melodic minor ascending and descending scales.

4. Label the following intervals.

In the measure directly below, write and label the inversion of each interval:



Musical notation for question 4. The first staff is a treble clef with a key signature of one sharp (F#). The intervals are: P5 (E4 to B4), M3 (E4 to G4), m3 (E4 to D4), P4 (E4 to A4), and P5 (E4 to B4). The second staff is a blank treble clef staff for writing the inversions of these intervals.

inversion: P4